

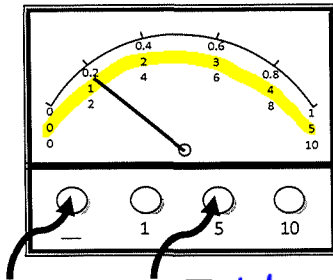
Name: _____

Date: _____

SNC 1PO Worksheet - Reading Ammeters and Voltmeters

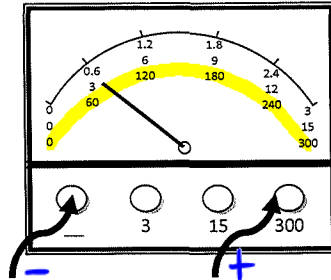
Read the following ammeters and voltmeters and write the answers on the lines below. Don't forget to include your units.

1) Ammeter



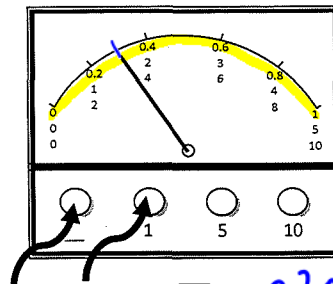
Reading: _____ 1.1A

2) Voltmeter



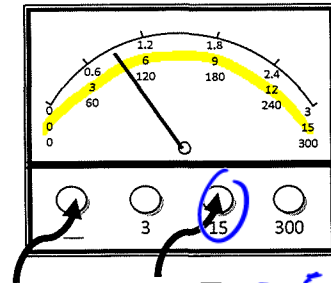
Reading: _____ 79-80V

3) Ammeter



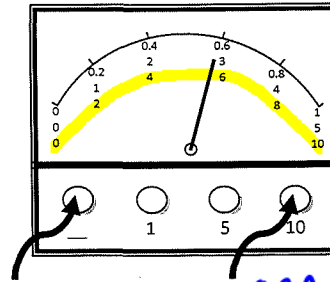
Reading: _____ 0.3A

4) Voltmeter



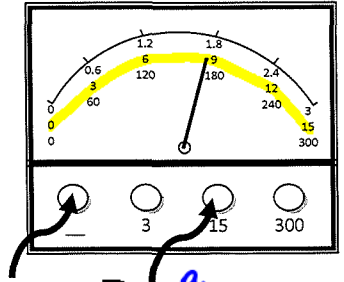
Reading: _____ 4.5-5V

6) Ammeter



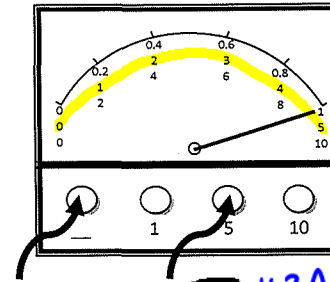
Reading: _____ 5.8A

7) Voltmeter



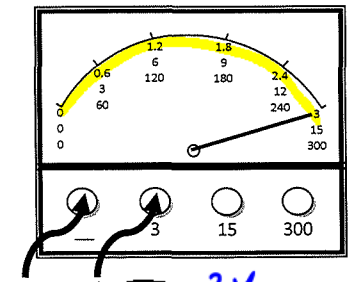
Reading: _____ 9V

8) Ammeter



Reading: _____ 4.8A

9) Voltmeter



Reading: _____ 3V